

_____ Name _____

Date _____

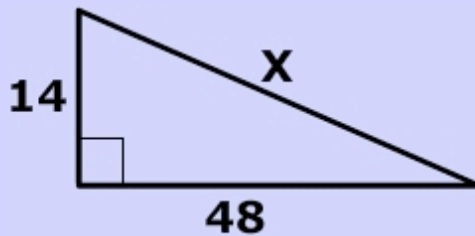
MATH: Pythagorean Theorem

Score: _____

1. Solve all three practice problems.

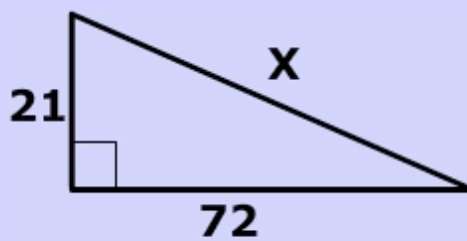
The Pythagorean Theorem

Practice Problems



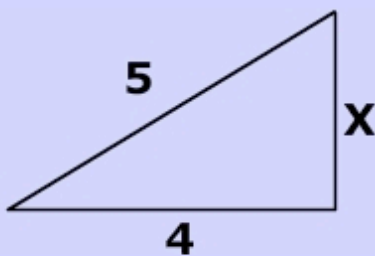
What is the value of x in the picture on the left?

Answer



What is the value of x in the picture on the left?

Answer



What is x in the triangle on the left?

Answer

<http://www.mathwarehouse.com/geometry/triangles/right-triangle.html>

http://www.ajdesigner.com/phptriangle/right_triangle_pythagorean_theorem_c.php