

_____ Name _____

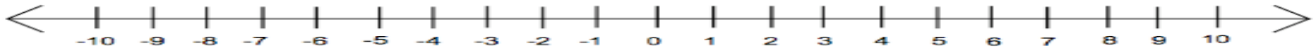
Date _____

INEQUALITIES: 1

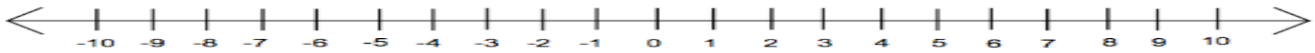
Score: _____

Solve and graph each inequality on the number line.

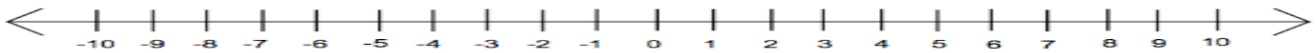
1. $x \leq 4$



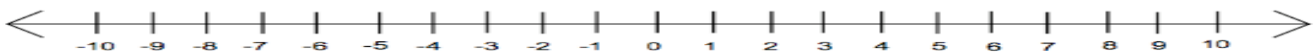
2. $x < 3$



3. $x \geq 7$



4. $x > 4$



Solve. Show your work.

5. $2x \leq 12$

6. $6 \geq x + 1$