

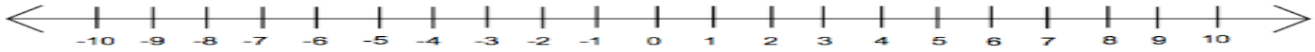
_____ Name _____ Date _____

INEQUALITIES: 2

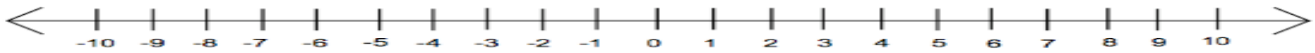
Score: _____

Solve and graph each equation or inequality on the number line.

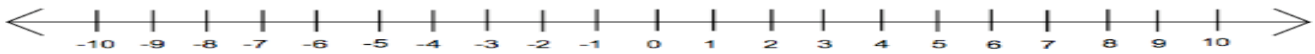
1. $x = 4$



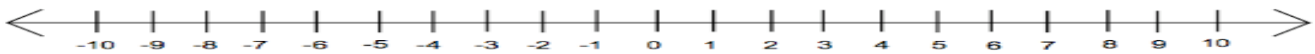
2. $x < 8$



3. $2x \geq 8$



4. $2 + x > 4$



Solve. Show your work.

5. $4 + x = 12$

6. $\frac{1}{2}x \geq 8$